





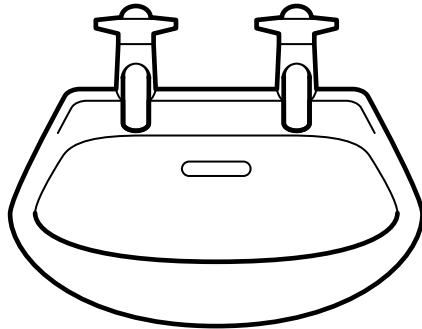

Summer Assessment

Learning outcomes 96–101

96. Ring the container that is nearly full.



97. Colour the container that holds more than a litre.



98. Add.

	t	u
	3	4
+	2	5

99. Add.

	t	u
		8
+		7

100. Add.

	t	u
	3	6
+		9

101. Tommy collected 56 shells. Timmy collected 8 shells.

t u

How many shells did they collect altogether?

+	

Name: _____

Date: _____

Summer Assessment

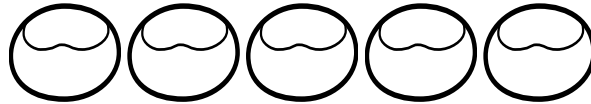
Learning outcomes 102–108

102. Add.

$$\begin{array}{r} \text{t u} \\ 58 \\ + 26 \\ \hline \end{array}$$

103. Mary had 29 conkers and Ronan had 27 conkers.

How many conkers did they have altogether?




$$\begin{array}{r} \text{t u} \\ + \\ \hline \end{array}$$

104. How much money is in the box?



c

105. Draw the least number of coins to make 77c.



106. Máire has



Cian has



How much money have they between them?

c

107.

$$\begin{array}{r} \text{t u} \\ 48 \\ - 15 \\ \hline \end{array}$$

108. Max had 37 marbles.
He lost 25 of them.

How many marbles has he now?

$$\begin{array}{r} \text{t u} \\ - \\ \hline \end{array}$$

Name: _____

Date: _____

Summer Assessment

Learning outcomes 109–110

109. Draw hands on the clock faces to show half an hour earlier and half an hour later than the middle clock. Write the times.

1/2 hour earlier *1/2 hour later*

_____ past _____

110. The months of spring are _____, March and April.

Name: _____

Date: _____